

Name: _____

October 26, 2020

MATHS WORKSHEET

GENERATOR

11-PLUS
SATS
GCSES



- 1) Find area of square having each side (s) equals 587 cm



Answer: _____

- 2) Find area of square having each side (s) equals 449 ft



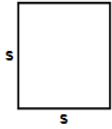
Answer: _____

- 3) Find area of square having each side (s) equals 272 ft



Answer: _____

- 4) Find area of square having each side (s) equals 282 m




Answer: _____

- 5) Find area of square having each side (s) equals 428 ft



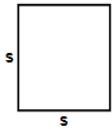
Answer: _____

- 6) Find area of square having each side (s) equals 975 ft




Answer: _____

- 7) Find area of square having each side (s) equals 441 ft



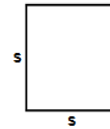
Answer: _____

- 8) Find area of square having each side (s) equals 711 m




Answer: _____

- 9) Find area of square having each side (s) equals 438 in



Answer: _____

- 10) Find area of square having each side (s) equals 388 ft



Answer: _____

Total: ____ / 10

Name: _____

Sr: 26102020-1772

October 26, 2020

MATHS WORKSHEET
GENERATOR



11-PLUS
SATS
GCSES



Answers:

1) 344569cm

2) 201601ft

3) 73984ft

4) 79524m

5) 183184ft

6) 950625ft

7) 194481ft

8) 505521m

9) 191844in

10) 150544ft